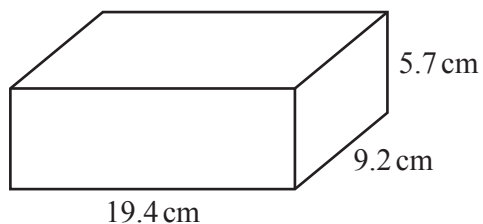


**[Turn over**

2

1 (a)



NOT TO  
SCALE

The diagram shows a brick in the shape of a cuboid.

(i) Calculate the total surface area of the brick.

.....  $\text{cm}^2$  [3]

(ii) The density of the brick is  $1.9 \text{ g/cm}^3$ .

Work out the mass of the brick.  
Give your answer in kilograms.  
[Density = mass  $\div$  volume]

..... kg [3]

(b) 9000 bricks are needed to build a house.  
200 bricks cost \$175.

Work out the cost of the bricks needed to build 5 houses.

\$ ..... [3]

3

- (c) Saskia builds a wall using 1500 bricks.  
She can build at the rate of 40 bricks each hour.  
She works for 9 hours each day.  
Saskia starts work on 6 July and works every day until the wall is completed.

Find the date when she completes the wall.

..... [3]

- (d) Rafa has a cylindrical tank.  
The cylinder has a height of 105 cm and a diameter of 45 cm.

Calculate the capacity of the tank in litres.

..... litres [3]

2 Bob, Chao and Mei take part in a run for charity.

(a) Their times to complete the run are in the ratio Bob : Chao : Mei = 4 : 5 : 7.

(i) Find Chao's time as a percentage of Mei's time.

..... % [1]

(ii) Bob's time for the run is 55 minutes 40 seconds.

Find Mei's time for the run.

Give your answer in minutes and seconds.

..... min ..... s [3]

(b) Chao collects \$47.50 for charity.

(i) Bob collects 28% more than Chao.

Find the amount Bob collects.

\$ ..... [2]

(ii) Chao collects 60% less than Mei.

Find how much more money Mei collects than Chao.

\$ ..... [3]

- (c) When running, Chao has a stride length of 70 cm, correct to the nearest 5 cm.  
Chao runs a distance of 11.2 km, correct to the nearest 0.1 km.

Work out the minimum number of strides that Chao could take to complete this distance.

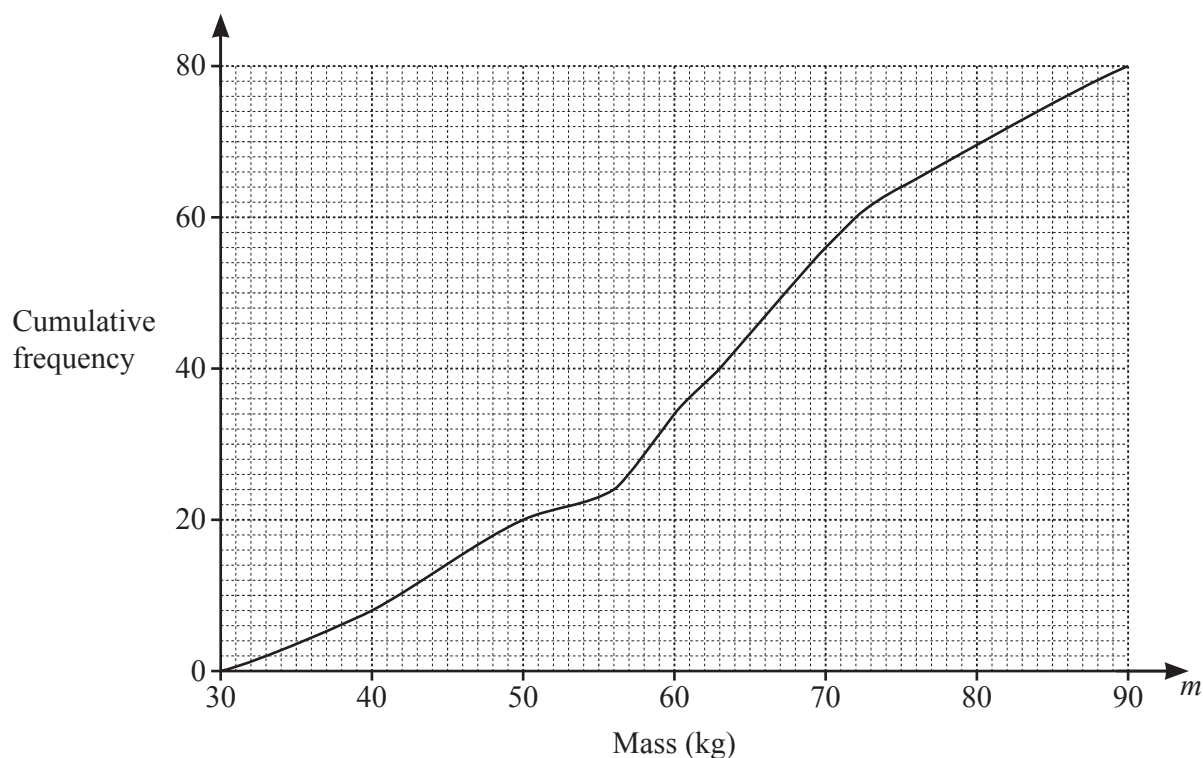
..... [4]

- (d) In 2015, a charity raised a total of \$1.6 million.  
After 2015, this amount increased exponentially by 2.4% each year for the next 5 years.

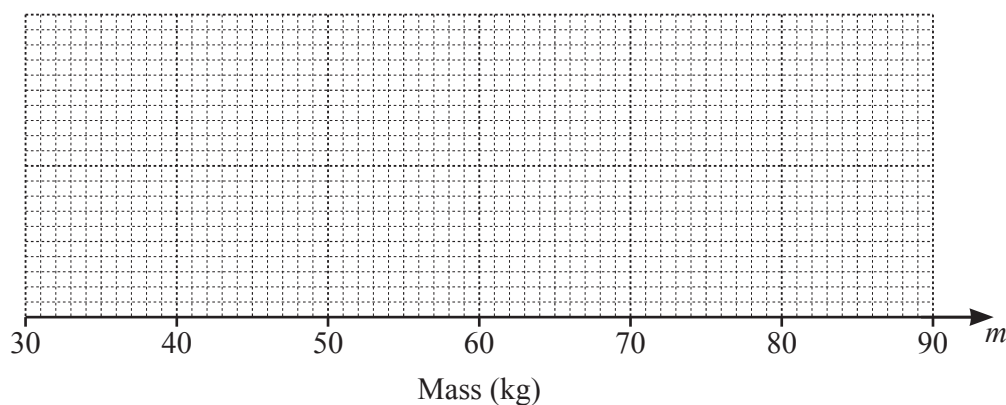
Work out the amount raised by the charity in 2020.

\$ ..... million [2]

- 3 The cumulative frequency diagram shows information about the mass,  $m$  kg, of each of 80 boys.



(a)



On the grid, draw a box-and-whisker plot to show the information in the cumulative frequency diagram. [4]

- (b) Use the cumulative frequency diagram to find an estimate of

(i) the 30th percentile,

..... kg [2]

(ii) the number of boys with a mass greater than 75 kg.

..... [2]

- (c) (i) Use the cumulative frequency diagram to complete this frequency table.

Mass ( $m$ kg)	$30 < m \leq 40$	$40 < m \leq 50$	$50 < m \leq 60$	$60 < m \leq 70$	$70 < m \leq 80$	$80 < m \leq 90$
Frequency	8	12			14	10

[1]

- (ii) Calculate an estimate of the mean mass of the boys.

..... kg [4]

- (iii) Two boys are chosen at random from those with a mass greater than 70 kg.

Find the probability that one of them has a mass greater than 80 kg and the other has a mass of 80 kg or less.

..... [3]

4 (a) Solve.

(i)  $6(7 - 2x) = 3x - 8$

$x = \dots\dots\dots$  [3]

(ii)  $\frac{2x}{x-5} = \frac{2}{3}$

$x = \dots\dots\dots$  [3]

(b) Factorise completely.

(i)  $2x^2 - 288y^2$

$\dots\dots\dots$  [3]

(ii)  $5x^2 + 17x - 40$

$\dots\dots\dots$  [2]

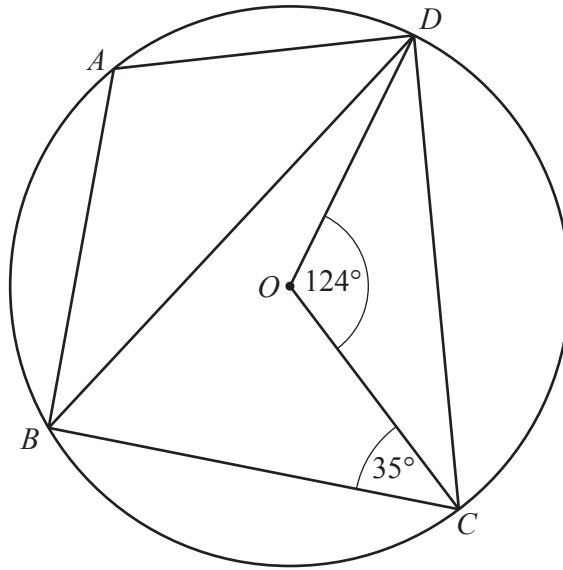


- (c) Solve  $x^3 + 4x^2 - 17x = x^3 - 9$  .

You must show all your working and give your answers correct to 2 decimal places.

$x = \dots\dots\dots$  or  $x = \dots\dots\dots$  [5]

5 (a)



NOT TO  
SCALE

$A, B, C$  and  $D$  are points on a circle, centre  $O$ .  
Angle  $COD = 124^\circ$  and angle  $BCO = 35^\circ$ .

- (i) Work out angle  $CBD$ .  
Give a geometrical reason for your answer.

Angle  $CBD = \dots\dots\dots$  because  $\dots\dots\dots$

$\dots\dots\dots$  [2]

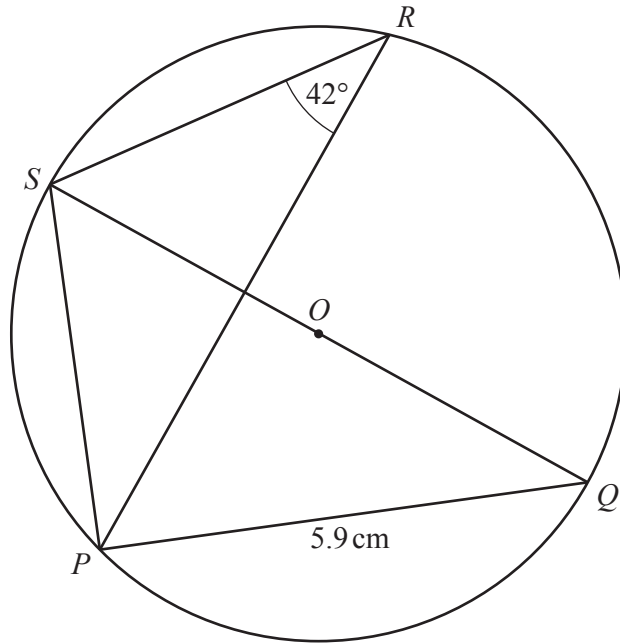
- (ii) Work out angle  $BAD$ .  
Give a geometrical reason for each step of your working.

Angle  $BAD = \dots\dots\dots$  because  $\dots\dots\dots$

$\dots\dots\dots$

$\dots\dots\dots$  [4]

(b)



NOT TO  
SCALE

$P$ ,  $Q$ ,  $R$  and  $S$  are points on a circle, centre  $O$ .  
 $QS$  is a diameter.  
 Angle  $PRS = 42^\circ$  and  $PQ = 5.9\text{ cm}$ .

Calculate the circumference of the circle.

..... cm [5]

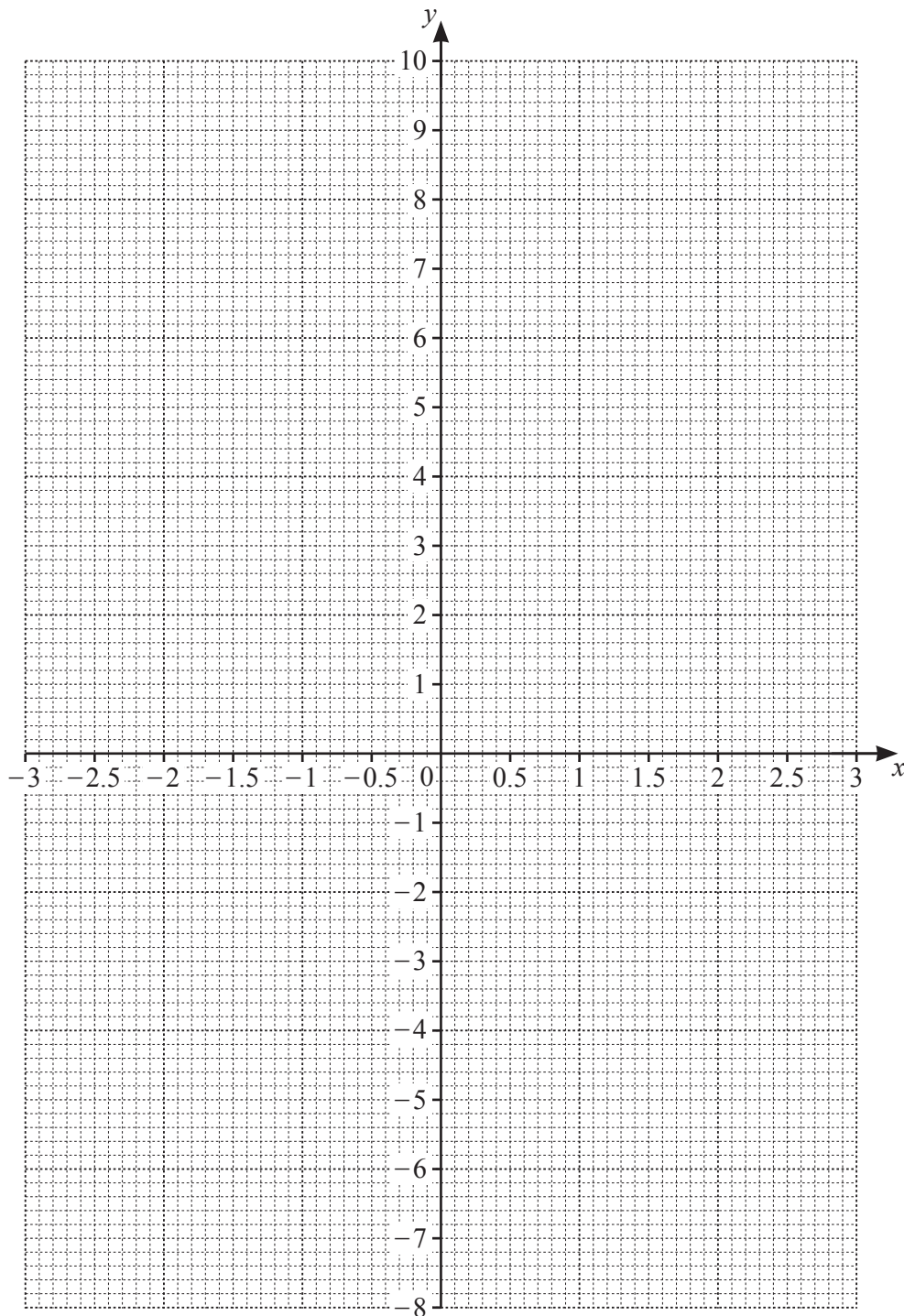
- 6 The table shows some values for  $y = x^2 - \frac{3}{2x}$ ,  $x \neq 0$ , given correct to 1 decimal place.

$x$	-3	-2	-1	-0.5	-0.2		0.2	0.5	1	2	3
$y$			2.5	3.3	7.5		-7.5	-2.8	-0.5	3.3	

- (a) (i) Complete the table.

[3]

- (ii) On the grid, draw the graph of  $y = x^2 - \frac{3}{2x}$  for  $-3 \leq x \leq -0.2$  and  $0.2 \leq x \leq 3$ .



[5]

- (b) By drawing a suitable straight line on the grid, solve the equation  $x^2 - \frac{3}{2x} = \frac{24}{5} - 2x$  for  $-3 \leq x \leq -0.2$  and  $0.2 \leq x \leq 3$ .

$x = \dots\dots\dots$  or  $x = \dots\dots\dots$  [4]

- (c) The solutions to the equation  $x^2 - \frac{3}{2x} = \frac{24}{5} - 2x$  are also the solutions to an equation of the form  $ax^3 + bx^2 + cx - 15 = 0$  where  $a$ ,  $b$  and  $c$  are integers.

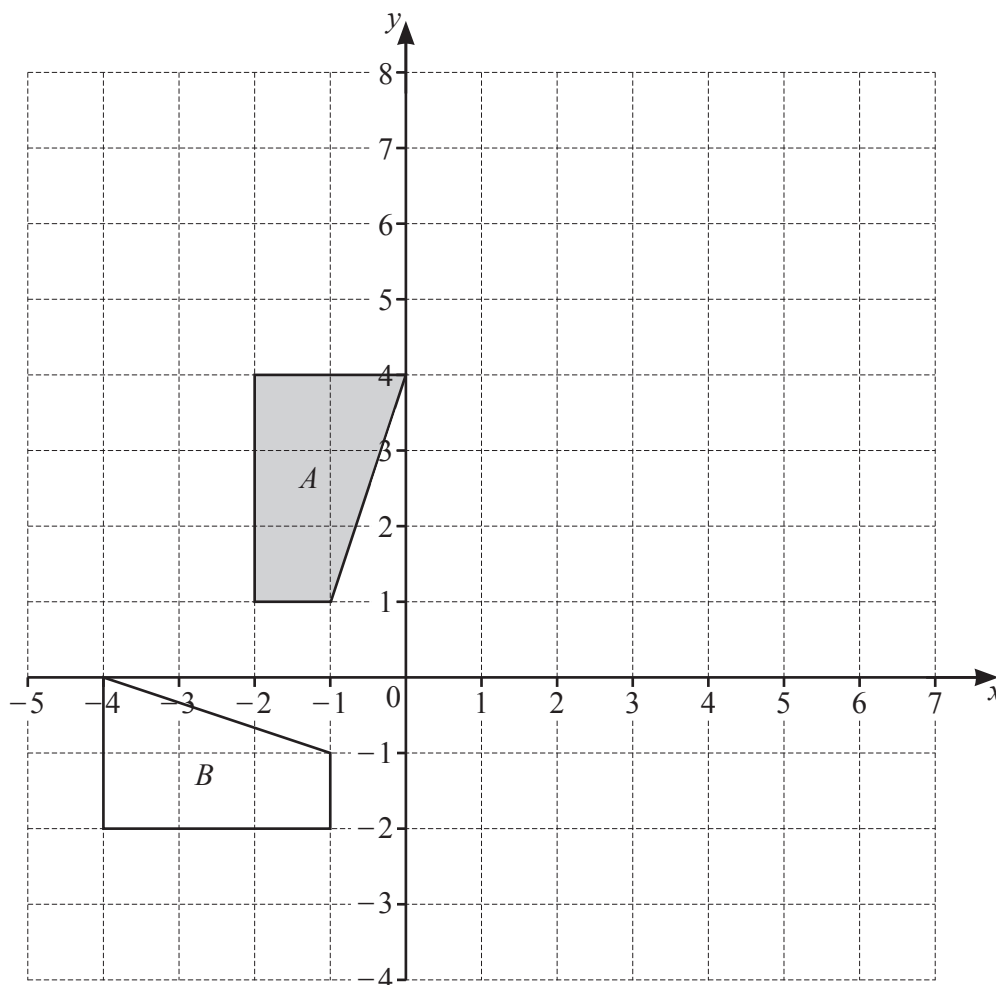
Find the values of  $a$ ,  $b$  and  $c$ .

$a = \dots\dots\dots$

$b = \dots\dots\dots$

$c = \dots\dots\dots$  [4]

7 (a)



(i) On the grid, draw the image of

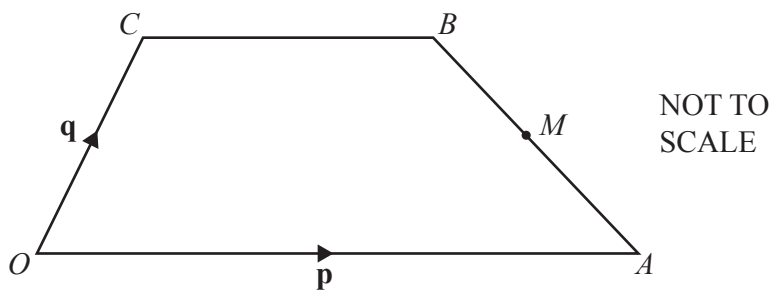
(a) shape  $A$  after an enlargement, scale factor 2, centre  $(0, 1)$ , [2]

(b) shape  $A$  after a reflection in the line  $y = x - 1$ . [3]

(ii) Describe fully the **single** transformation that maps shape  $A$  onto shape  $B$ .

..... [3]  
.....

(b)



$OABC$  is a trapezium and  $O$  is the origin.

$M$  is the midpoint of  $AB$ .

$\vec{OA} = \mathbf{p}$ ,  $\vec{OC} = \mathbf{q}$  and  $OA = 2CB$ .

Find, in terms of  $\mathbf{p}$  and  $\mathbf{q}$ , the position vector of  $M$ .  
Give your answer in its simplest form.

..... [3]

8 (a)  $f(x) = 3 - 5x$

(i) Find  $x$  when  $f(x) = -5$ .

$$x = \dots\dots\dots [2]$$

(ii) Find  $f^{-1}(x)$ .

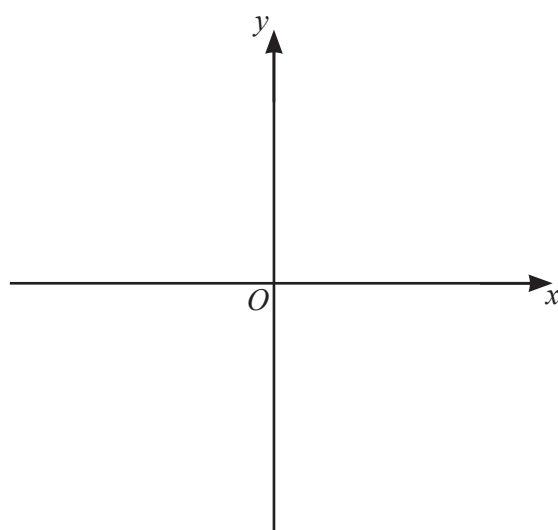
$$f^{-1}(x) = \dots\dots\dots [2]$$

(b)  $g(x) = 18 - 3x - x^2$

(i) Write  $g(x)$  in the form  $b - (a + x)^2$ .

$$\dots\dots\dots [3]$$

(ii) Sketch the graph of  $y = g(x)$ .  
On your sketch, show the coordinates of the turning point.



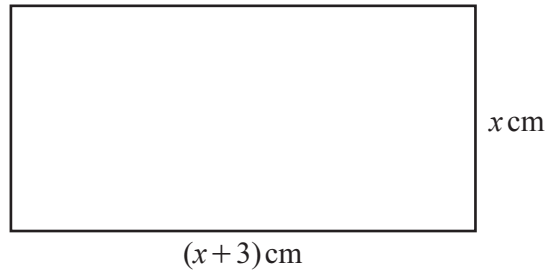
[3]



- (iii) Find the equation of the tangent to the graph of  $y = 18 - 3x - x^2$  at  $x = 4$ .  
Give your answer in the form  $y = mx + c$ .

$y = \dots\dots\dots$  [6]

9 (a)



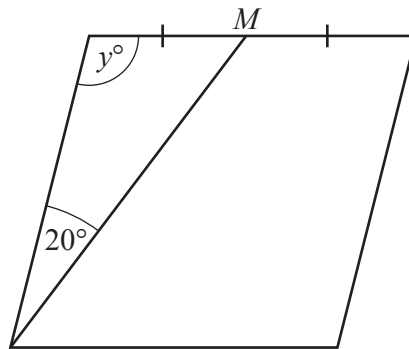
NOT TO  
SCALE

This rectangle has perimeter 20 cm.

Find the value of  $x$ .

$x = \dots\dots\dots$  [3]

(b)



NOT TO  
SCALE

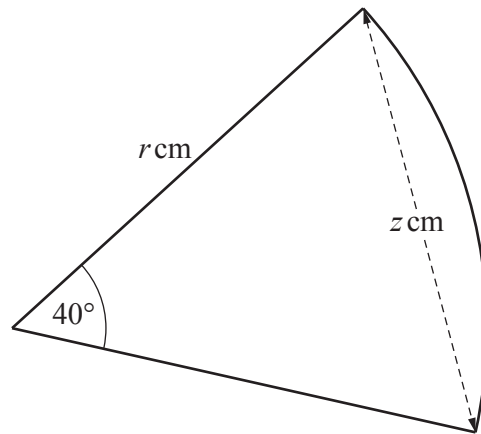
This rhombus has perimeter 20 cm and angle  $y$  is obtuse.  
 $M$  is the midpoint of one of the sides.

Find the value of  $y$ .

$y = \dots\dots\dots$  [5]

19

(c)



NOT TO  
SCALE

This sector of a circle has radius  $r$  and perimeter 20 cm.

Find the value of  $z$ .

$z =$  ..... [6]

---

Permission to reproduce items where third-party owned material protected by copyright is included has been sought and cleared where possible. Every reasonable effort has been made by the publisher (UCLES) to trace copyright holders, but if any items requiring clearance have unwittingly been included, the publisher will be pleased to make amends at the earliest possible opportunity.

To avoid the issue of disclosure of answer-related information to candidates, all copyright acknowledgements are reproduced online in the Cambridge Assessment International Education Copyright Acknowledgements Booklet. This is produced for each series of examinations and is freely available to download at [www.cambridgeinternational.org](http://www.cambridgeinternational.org) after the live examination series.

Cambridge Assessment International Education is part of the Cambridge Assessment Group. Cambridge Assessment is the brand name of the University of Cambridge Local Examinations Syndicate (UCLES), which itself is a department of the University of Cambridge.