

[Turn over

- 1 The probability that Jane wins a game is $\frac{7}{10}$.

(a) Find the probability that Jane does not win the game.

..... [1]

(b) Jane plays this game 50 times.

Find the number of times she is expected to win the game.

..... [1]

- 2 Calculate $\sqrt[4]{0.0256}$.

..... [1]

- 3 Emma has 15 mathematics questions to complete.
The stem-and-leaf diagram shows the time, in minutes, it takes her to complete each question.

0	3	5	6	7	7	8	8
1	1	2	2	3	6	6	6
2	0						

Key: 2 | 0 = 20 minutes

Complete the table.

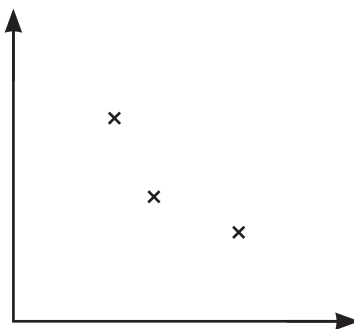
Mode min
Median min
Range min

[3]

- 4 Write down an expression for the range of k consecutive integers.

..... [1]

- 5 (a) Henrik draws this scatter diagram.



Put a ring around the **one** correct statement about this scatter diagram.

It shows
no correlation.

It is not possible to tell if
there is correlation as there
are not enough points.

It shows negative
correlation.

It shows positive
correlation.

[1]

- (b) Each of the four scatter diagrams shows the same set of data.
A line has been drawn on each diagram.

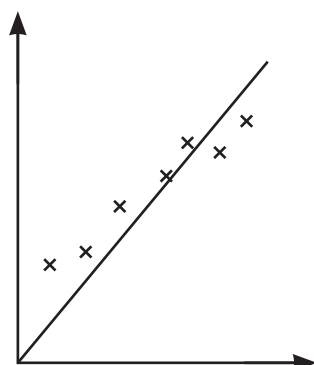


Diagram A

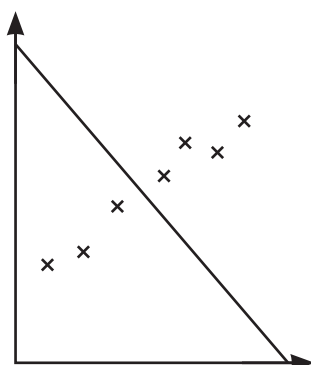


Diagram B

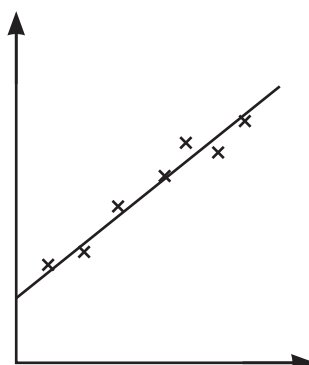


Diagram C

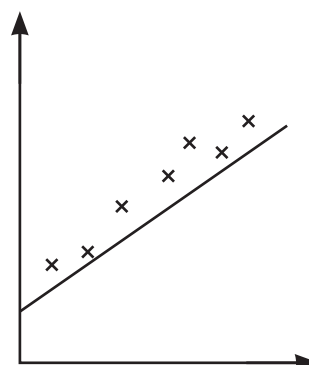


Diagram D

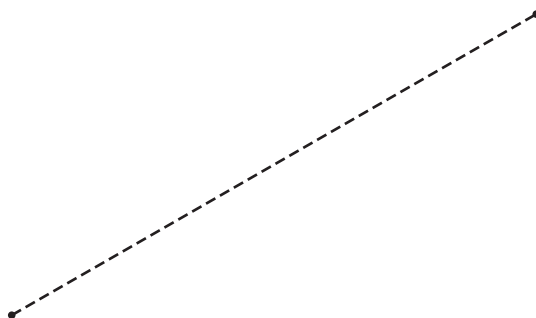
Complete the statement.

The line in Diagram is the most appropriate line of best fit.

[1]

- 6 A rhombus has side length 6.5 cm.
The rhombus can be constructed by drawing two triangles.

Using a ruler and compasses only, construct the rhombus.
Leave in your construction arcs.
One diagonal of the rhombus has been drawn for you.



[2]

- 7 (a) Complete these statements.

The reciprocal of 0.2 is

A prime number between 90 and 100 is

[2]

(b)

$\frac{7}{5}$ 0.6 $\sqrt{7}$ 8 $\sqrt{9}$

From this list, write down an irrational number.

..... [1]

8 $a = \frac{b^2}{5c}$

Find b when $a = 5.625$ and $c = 2$.

$b = \dots\dots\dots$ [2]

9 **Without using a calculator**, work out $\frac{2}{3} \div 1\frac{3}{7}$.

You must show all your working and give your answer as a fraction in its simplest form.

$\dots\dots\dots$ [3]

10 (a) Write 0.006 54 in standard form.

$\dots\dots\dots$ [1]

(b) The number 1.467×10^{102} is written as an ordinary number.

Write down the number of zeros that follow the digit 7.

$\dots\dots\dots$ [1]

11 Write $0.\dot{0}\dot{4}$ as a fraction in its simplest form.

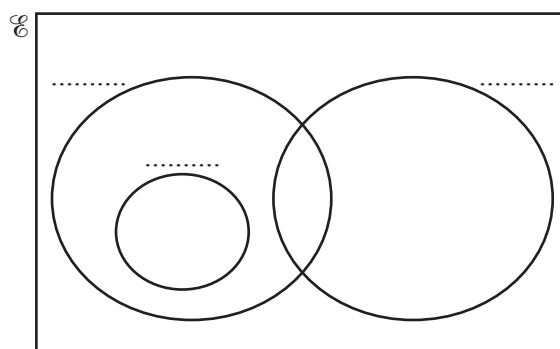
..... [1]

- 12 (a) $\mathcal{E} = \{\text{integers greater than 2}\}$
 $A = \{\text{prime numbers}\}$
 $B = \{\text{odd numbers}\}$
 $C = \{\text{square numbers}\}$

(i) Describe the type of numbers in the set $B' \cap C$.

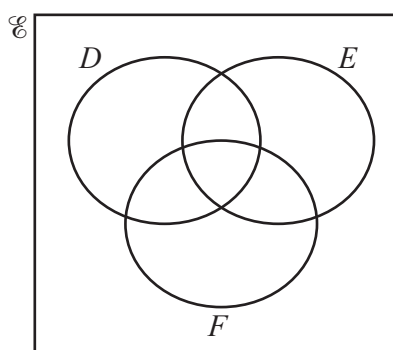
..... [1]

(ii) Complete the set labels on the Venn diagram.



[1]

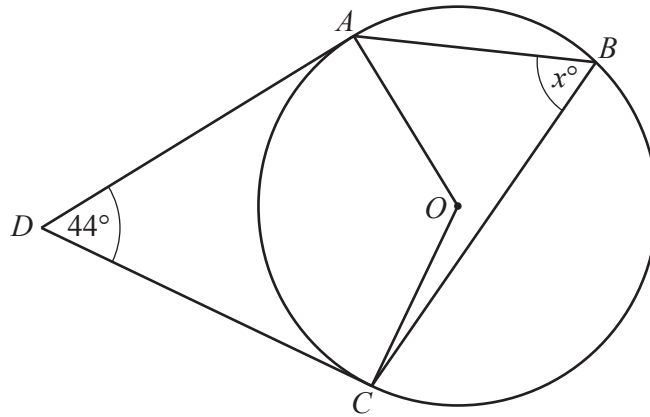
(b)



Shade the region $D' \cup (E \cap F)'$.

[1]

13



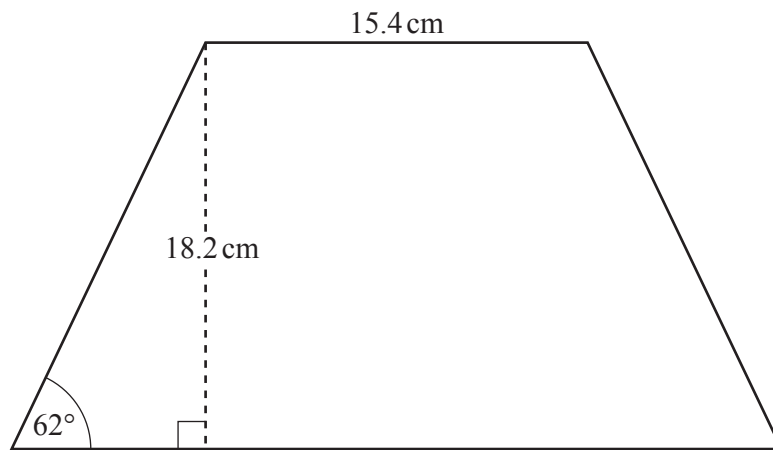
NOT TO
SCALE

A , B and C are points on a circle, centre O .
 DA and DC are tangents.
 Angle $ADC = 44^\circ$.

Work out the value of x .

$x = \dots\dots\dots$ [3]

14



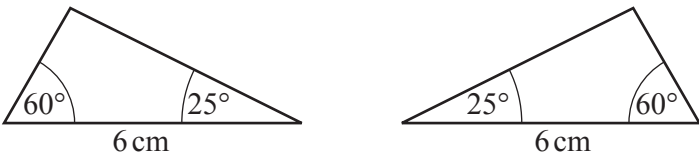
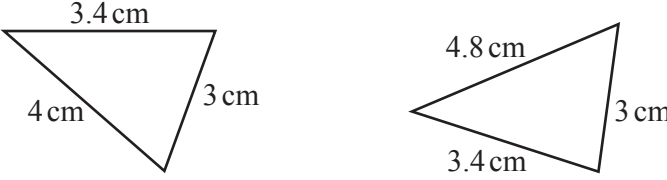
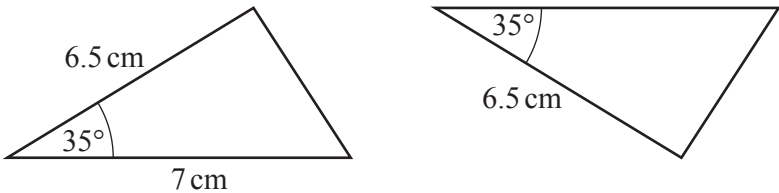
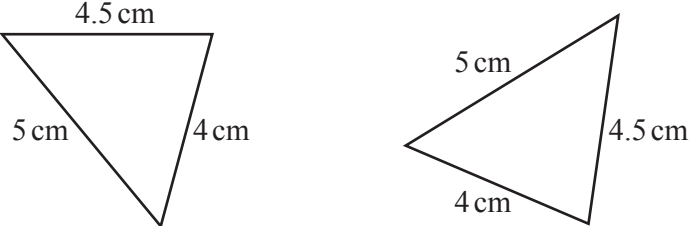
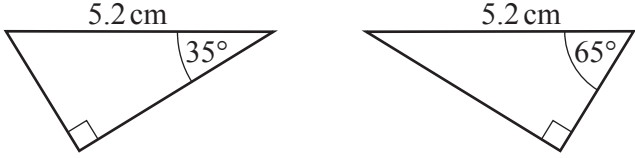
NOT TO
SCALE

The diagram shows a trapezium.
The trapezium has one line of symmetry.

Work out the area of the trapezium.

..... cm^2 [4]

- 15** Complete the table showing information about the congruence of pairs of triangles.
The first two rows have been completed for you.
All diagrams are not to scale.

Pair of triangles	Congruent or not congruent	Congruence criterion
	Congruent	ASA
	Not congruent	None
		
		
		

[3]

16 A is the point $(5, 7)$ and B is the point $(9, -1)$.

(a) Find the length AB .

..... [3]

(b) Find the equation of the line AB .

..... [3]

17 Find the gradient of the line that is perpendicular to the line $3y = 4x - 5$.

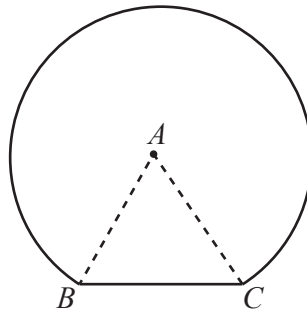
..... [2]

18 $f(x) = x^2 - 25$ $g(x) = x + 4$

Solve $fg(x+1) = gf(x)$.

$x = \dots\dots\dots$ [4]

19 (a)



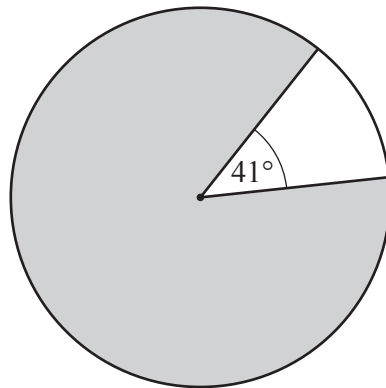
NOT TO
SCALE

The diagram shows a shape made from an equilateral triangle ABC and a sector of a circle.
Points B and C lie on the circle, centre A .
The side length of the equilateral triangle is 12.4 cm.

Work out the perimeter of the shape.

..... cm [3]

(b)



NOT TO
SCALE

The diagram shows two sectors of a circle.
The major sector is shaded.
The area of the major sector is 74.5 cm^2 .

Calculate the radius of the circle.

..... cm [3]

20 Expand and simplify.

$$(x-2)(2x+5)(x+3)$$

..... [3]

21 The force of attraction, F Newtons, between two magnets is inversely proportional to the square of the distance, d cm, between the magnets.

When $d = 1.5$, $F = 48$.

(a) Find an expression for F in terms of d .

$F =$ [2]

(b) When the distance between the two magnets is doubled the new force is n times the original force.

Work out the value of n .

$n =$ [1]

22 Simplify.

$$\frac{2x^2 - 5x - 12}{3x^2 - 12x}$$

..... [4]

23 Find all the solutions of $4 \sin x = 3$ for $0^\circ \leq x \leq 360^\circ$.

..... [2]

24 Solve.

$$\frac{1}{x+1} + \frac{9}{x+9} = 1$$

$$x = \dots\dots\dots \text{ or } x = \dots\dots\dots [5]$$

Permission to reproduce items where third-party owned material protected by copyright is included has been sought and cleared where possible. Every reasonable effort has been made by the publisher (UCLES) to trace copyright holders, but if any items requiring clearance have unwittingly been included, the publisher will be pleased to make amends at the earliest possible opportunity.

To avoid the issue of disclosure of answer-related information to candidates, all copyright acknowledgements are reproduced online in the Cambridge Assessment International Education Copyright Acknowledgements Booklet. This is produced for each series of examinations and is freely available to download at www.cambridgeinternational.org after the live examination series.

Cambridge Assessment International Education is part of the Cambridge Assessment Group. Cambridge Assessment is the brand name of the University of Cambridge Local Examinations Syndicate (UCLES), which itself is a department of the University of Cambridge.