



UNIVERSITY OF CAMBRIDGE INTERNATIONAL EXAMINATIONS  
General Certificate of Education Ordinary Level

CANDIDATE  
NAME

CENTRE  
NUMBER

--	--	--	--	--

CANDIDATE  
NUMBER

--	--	--	--



**MATHEMATICS (SYLLABUS D)**

**4024/01**

Paper 1

**October/November 2009**

**2 hours**

Candidates answer on the Question Paper.

Additional Materials: Geometrical instruments

**READ THESE INSTRUCTIONS FIRST**

Write your Centre number, candidate number and name on all the work you hand in.

Write in dark blue or black pen.

You may use a pencil for any diagrams or graphs.

Do not use staples, paper clips, highlighters, glue or correction fluid.

DO **NOT** WRITE IN ANY BARCODES.

Answer **all** questions.

If working is needed for any question it must be shown in the space below that question.

Omission of essential working will result in loss of marks.

**NEITHER ELECTRONIC CALCULATORS NOR MATHEMATICAL TABLES MAY BE USED IN THIS PAPER.**

The number of marks is given in brackets [ ] at the end of each question or part question.

The total of the marks for this paper is 80.

**For Examiner's Use**

--

This document consists of **23** printed pages and **1** blank page.



NEITHER ELECTRONIC CALCULATORS NOR MATHEMATICAL TABLES  
MAY BE USED IN THIS PAPER.

1 (a) Evaluate  $\frac{2}{3} - \frac{4}{7}$ .

Answer (a) .....[1]

(b) Evaluate  $1\frac{1}{3} \times \frac{5}{8}$ , giving your answer in its simplest form.

Answer (b) .....[1]

---

2 (a) Add brackets to the equation in the answer space to make it correct.

Answer (a)  $4 + 6 \times 7 - 5 = 16$  [1]

(b) Find the value of  $27 \times 0.002$ .

Answer (b) .....[1]

3 Arrange these values in order of size, starting with the smallest.

$$\frac{9}{20}$$

0.39

46%

$$\frac{2}{5}$$

Answer .....[2]  
smallest

---

4 The numbers 294 and 784, written as the product of their prime factors, are

$$294 = 2 \times 3 \times 7^2, \quad 784 = 2^4 \times 7^2.$$

Find

(a) the largest integer which is a factor of both 294 and 784,

Answer (a) .....[1]

(b)  $\sqrt{784}$ .

Answer (b) .....[1]

---

- 5 (a) The local time in Singapore is 7 hours ahead of the local time in London.  
A flight to London leaves Singapore at 03 00 local time.  
The flight takes 12 hours and 45 minutes.  
What is the local time in London when it arrives?

Answer (a) .....[1]

- (b) Mai changes £250 into dollars.  
The exchange rate is £1 = \$3.10.  
How many dollars does she receive?

Answer (b) \$ .....[1]

- 
- 6  $y$  is inversely proportional to  $x$ .  
Given that  $y = 250$  when  $x = 4$ , find  $y$  when  $x = 80$ .

Answer  $y =$  .....[2]

---

- 7 Tom estimated the population of five countries in 2020. The table below shows these estimates.

Country	Population
Australia	$2.35 \times 10^7$
Brazil	$1.95 \times 10^9$
China	$1.4 \times 10^9$
Japan	$1.36 \times 10^8$
United Kingdom	$6.9 \times 10^7$

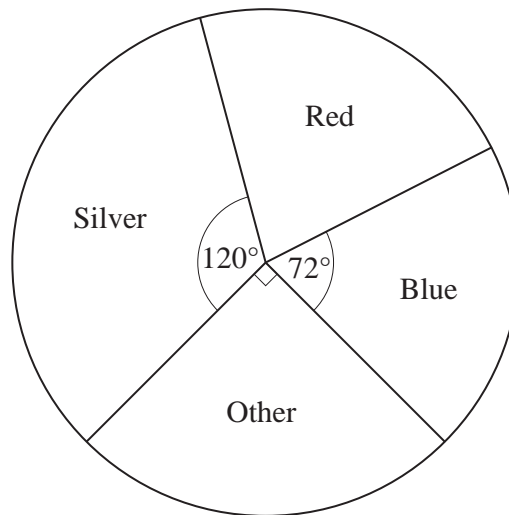
- (a) Which country did he estimate would have a population about 20 times that of the United Kingdom?

Answer (a) .....[1]

- (b) How many more people did he estimate would be in Japan than in Australia? Give your answer in standard form.

Answer (b) .....[2]

- 8 The colours of the cars which passed a house were noted.  
The results are shown in the pie chart below.



There were 12 blue cars.

How many cars

(a) passed the house,

Answer (a) .....[1]

(b) were red?

Answer (b) .....[2]

- 9 The force acting on an object during a collision is given by the formula

$$F = \frac{mv - mu}{t}.$$

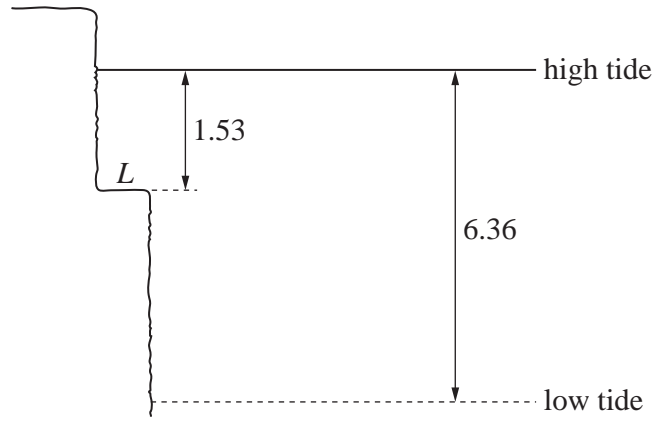
- (a) Given that  $m = 4$ ,  $v = 5$ ,  $u = 3$  and  $t = 0.01$ , find the value of  $F$ .

Answer (a)  $F = \dots\dots\dots$ [1]

- (b) Rearrange the formula to make  $m$  the subject.

Answer (b)  $m = \dots\dots\dots$ [2]

10



The sea level at high tide is 1.53 m above a ledge,  $L$ , on a cliff.  
 At low tide the sea level is 6.36 m below the sea level at high tide.

(a) How far below  $L$  is the sea level at low tide?

Answer (a) ..... m [1]

(b) On a certain day, high tide is at 0732.  
 After 2 hours and 34 minutes, the sea level has dropped  $\frac{1}{3}$  of the distance between high tide and low tide.

(i) At what time does the sea reach this level?

Answer (b)(i) .....[1]

(ii) How far below  $L$  is the sea level at this time?

Answer (b)(ii) ..... m [1]



11 The table below shows the number of pets owned by 20 families.

Number of pets	0	1	2	3	4	5	6	7
Number of families	2	5	3	2	4	1	1	2

Find

(a) the modal number of pets,

*Answer (a)* .....[1]

(b) the mean number of pets.

*Answer (b)* .....[2]

---

12 Given that  $f(x) = 4x - 7$ , find

(a)  $f\left(\frac{1}{2}\right)$ ,

Answer (a)  $f\left(\frac{1}{2}\right) = \dots\dots\dots[1]$

(b) the value of  $p$  when  $f(p) = p$ .

Answer (b)  $p = \dots\dots\dots[2]$

---

13 (a) Express  $\frac{2m}{5} + \frac{m}{4}$  as a single fraction in its simplest terms.

Answer (a)  $\dots\dots\dots[1]$

(b) Solve the inequality  $5(x + 4) < 7x$ .

Answer (b)  $x \dots\dots\dots[2]$

---



Examine  
Use

- 14 (a) Find the coordinates of the point where the line  $2y = 3x + 15$  crosses the y-axis.

Answer (a) (.....,.....) [1]

- (b) The coordinates of the points  $P$  and  $Q$  are  $(-1, 10)$  and  $(3, 4)$  respectively.

Find

- (i) the gradient of  $PQ$ ,

Answer (b)(i) .....[1]

- (ii) the midpoint of  $PQ$ .

Answer (b)(ii) (.....,.....) [1]

15       $\mathbf{a} = \begin{pmatrix} 3 \\ -4 \end{pmatrix}$        $\mathbf{b} = \begin{pmatrix} -1 \\ 7 \end{pmatrix}$

(a) Express  $\mathbf{a} + 2\mathbf{b}$  as a column vector.

Answer (a)       $\mathbf{a} + 2\mathbf{b} = \begin{pmatrix} \phantom{0} \\ \phantom{0} \end{pmatrix}$       [1]

(b) (i) Find  $|\mathbf{a}|$ .

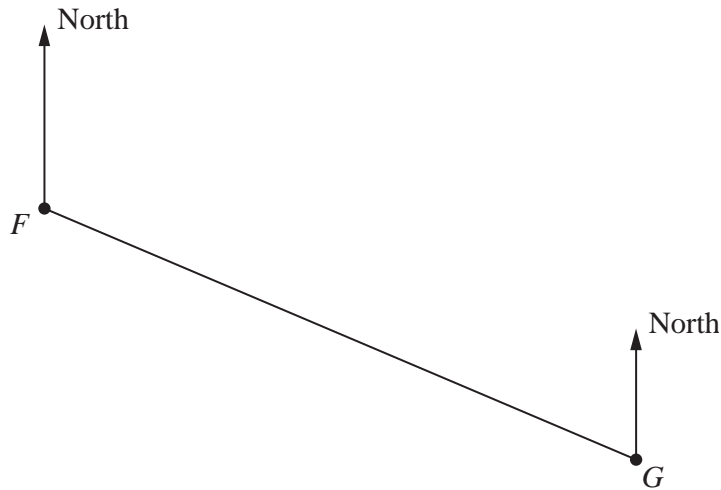
Answer (b)(i)  $|\mathbf{a}| = \dots\dots\dots$ [1]

(ii) Given that  $\frac{|\mathbf{b}|}{|\mathbf{a}|} = \sqrt{n}$ , where  $n$  is an integer, find the value of  $n$ .

Answer (b)(ii)  $n = \dots\dots\dots$ [1]

- 16 The scale drawing below shows the positions of two towns,  $F$  and  $G$ . It is drawn to a scale of 1 cm to 3 km.

Answer (b)



(a) Find

- (i) the distance, in kilometres, between towns  $F$  and  $G$ ,

Answer (a)(i) ..... km [1]

- (ii) the bearing of  $G$  from  $F$ .

Answer (a)(ii) ..... [1]

(b) Town  $H$  is to the North of the line  $FG$ . It is 19.5 km from  $F$  and 15 km from  $G$ .

On the diagram above, find and label the position of  $H$ .

[1]

17 The table below shows the distribution of the length, in metres, of cars in a car park.

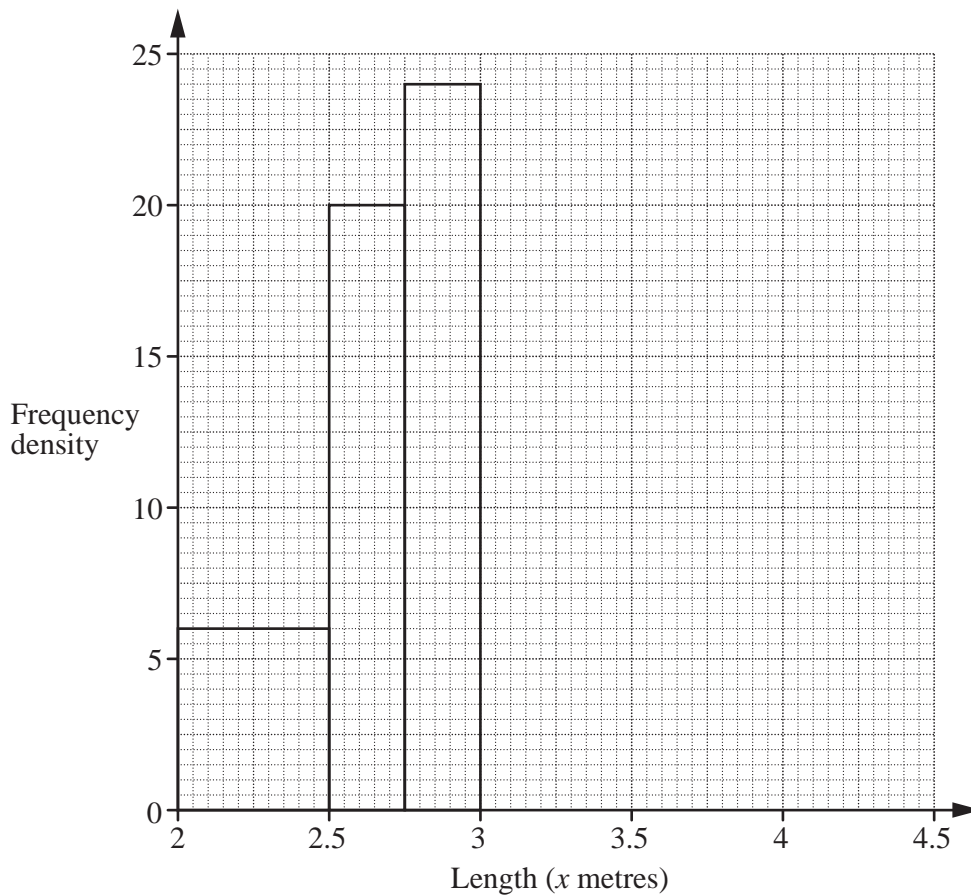
Length ( $x$ metres)	$2 \leq x < 2.5$	$2.5 \leq x < 2.75$	$2.75 \leq x < 3$	$3 \leq x < 3.5$	$3.5 \leq x < 4.5$
Number of cars	3	5	$p$	8	4

(a) Use the histogram in the answer space to find  $p$ .

Answer (a)  $p = \dots\dots\dots$ [1]

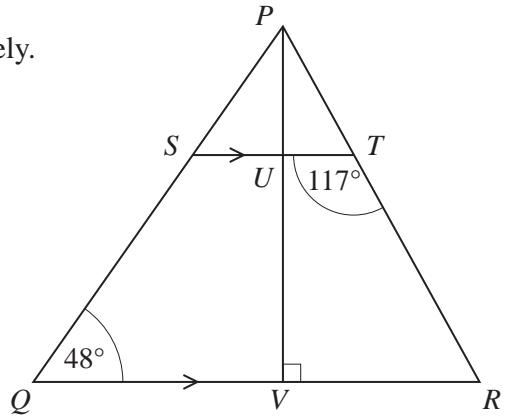
(b) Complete the histogram.

Answer (b)



[2]

- 18 The diagram shows the triangle  $PQR$ .  
The points  $S$  and  $T$  lie on the lines  $PQ$  and  $PR$  respectively.  
The line  $ST$  is parallel to the line  $QR$ .



- (a)  $\hat{S}TR = 117^\circ$  and  $\hat{S}QR = 48^\circ$ .  
Find  $\hat{Q}PR$ .

Answer (a)  $\hat{Q}PR = \dots\dots\dots[1]$

- (b)  $U$  and  $V$  are points on  $ST$  and  $QR$  respectively.  
 $PUV$  is a straight line with  $2PU = UV$  and  $\hat{P}VR = 90^\circ$ .

Find

- (i)  $PU : PV$ ,

Answer (b)(i)  $\dots\dots\dots : \dots\dots\dots[1]$

- (ii) the ratio of the area of triangle  $PQR$  to the area of the trapezium  $STRQ$ .

Answer (b)(ii)  $\dots\dots\dots : \dots\dots\dots[2]$

19 (a) Factorise completely

(i)  $21a^2 - 14a$ ,

Answer (a)(i) .....[1]

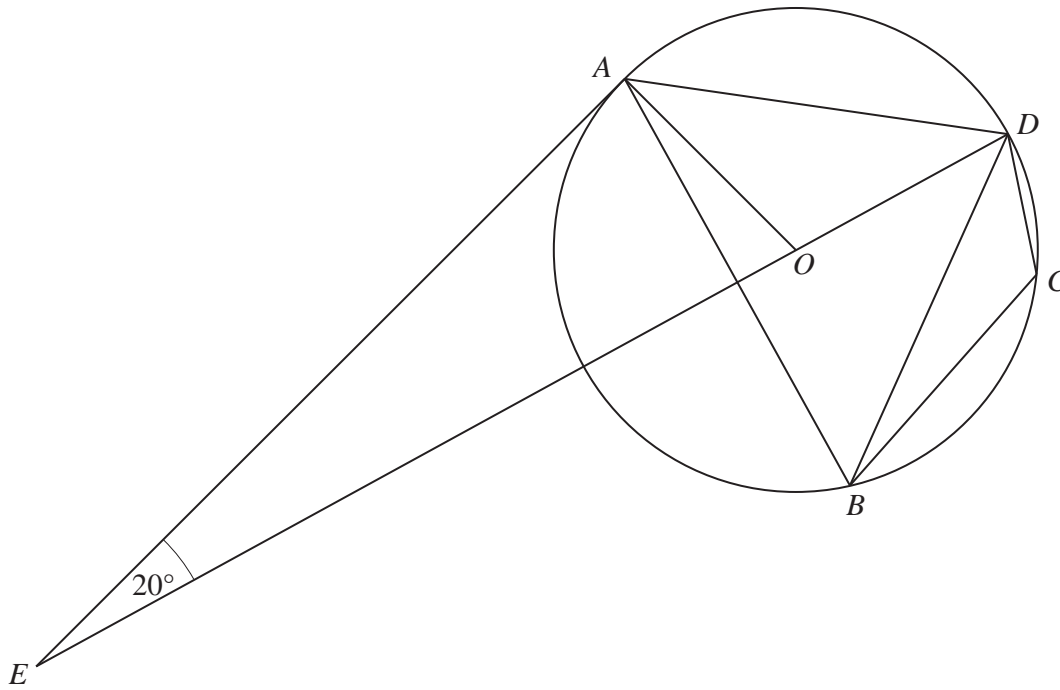
(ii)  $x^2 - 3x - 40$ .

Answer (a)(ii) .....[1]

(b) Given that  $y = 3$  is a solution of the equation  $2y^2 + ky - 27 = 0$ , find the other solution.

Answer (b)  $y =$  .....[2]





The quadrilateral  $ABCD$  has its vertices on the circumference of a circle.  
 $AE$  is a tangent to the circle and  $\hat{AED} = 20^\circ$ .  
 The centre of the circle,  $O$ , lies on the straight line  $DE$ .

(a) Find  $\hat{ADO}$ .

Answer (a)  $\hat{ADO} = \dots\dots\dots[2]$

(b) Given that  $DE$  is the perpendicular bisector of  $AB$  and  $\hat{DBA} = 55^\circ$ ,

(i) write down  $\hat{BAD}$ ,

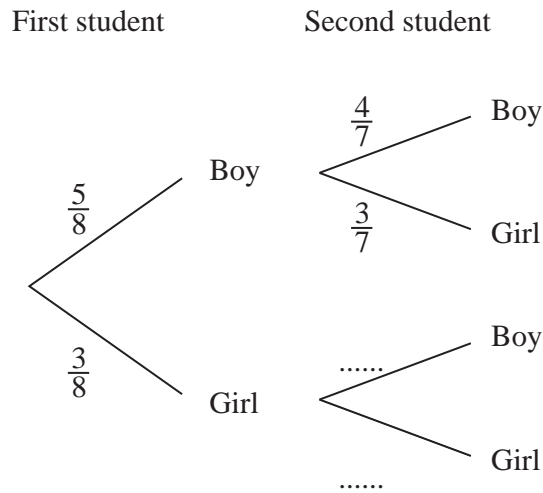
Answer (b)(i)  $\hat{BAD} = \dots\dots\dots[1]$

(ii) find  $\hat{BCD}$ .

Answer (b)(ii)  $\hat{BCD} = \dots\dots\dots[1]$

- 21 In a group of 8 students there are 5 boys and 3 girls.  
Two students are chosen at random.  
The tree diagram shows the possible outcomes and their probabilities.

Answer (a)



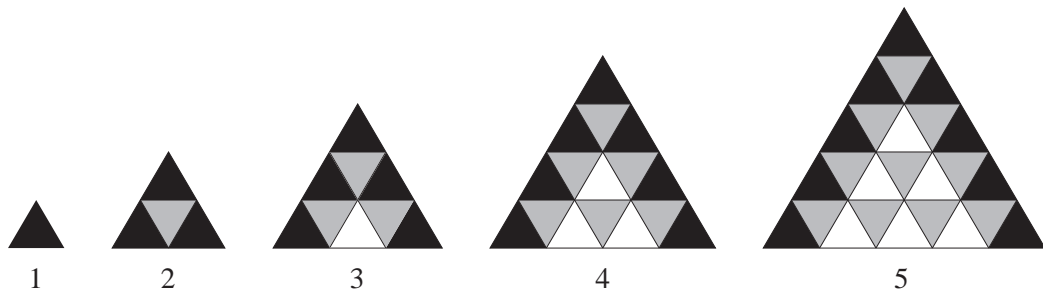
- (a) Complete the tree diagram. [1]
- (b) Expressing each answer as a fraction in its lowest terms, find the probability that
- (i) two boys are chosen,

Answer (b)(i) .....[1]

- (ii) at least one boy is chosen.

Answer (b)(ii) .....[2]

22 The diagrams below show small black, grey and white triangles forming a pattern.



The table below shows the number of triangles in each diagram.

Answer (a)

Diagram ( $n$ )	1	2	3	4	5	6
Small triangles	1	4	9	16	25	
Black triangles	1	3	5	7	9	
Grey triangles	0	1	3	6	10	
White triangles	0	0	1	3	6	10

(a) Complete the column for Diagram 6. [2]

(b) Write an expression, in terms of  $n$ , for the number of

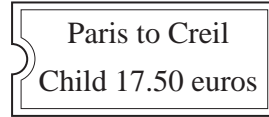
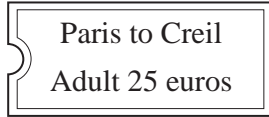
(i) small triangles in Diagram  $n$ ,

Answer (b)(i) .....[1]

(ii) black triangles in Diagram  $n$ .

Answer (b)(ii) .....[1]

23 (a)



During a visit to France, a family took a train from Paris to Creil.  
The cost of an adult ticket was 25 euros and the cost of a child ticket was 17.50 euros.

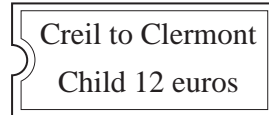

(i) How much did it cost for a family of 2 adults and 3 children?

Answer (a)(i) ..... euros [1]

(ii) Express the cost of a child ticket as a percentage of the cost of an adult ticket.

Answer (a)(ii) ..... % [2]

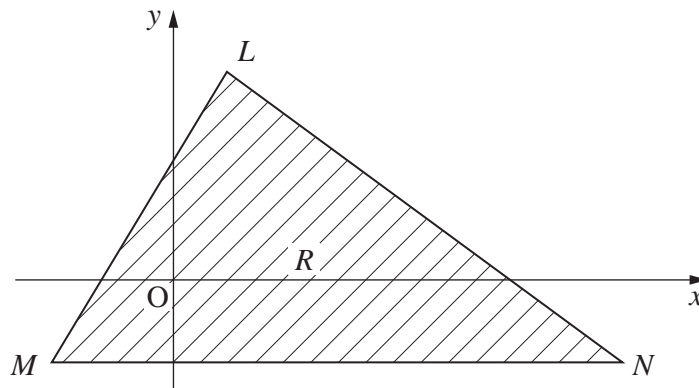
(b)



At Creil the family changed trains and travelled to Clermont.  
The cost of a child ticket was 12 euros.  
The cost of a child ticket was 60% of the cost of an adult ticket.  
What was the cost of an adult ticket?

Answer (b) ..... euros [2]

24 The diagram below shows triangle  $LMN$ .



The equations of the lines  $LM$  and  $LN$  are  $2y = 3x + 5$  and  $x + 4y = 24$  respectively.

- (a) Solve the simultaneous equations  $x + 4y = 24$ ,  
 $2y = 3x + 5$ .

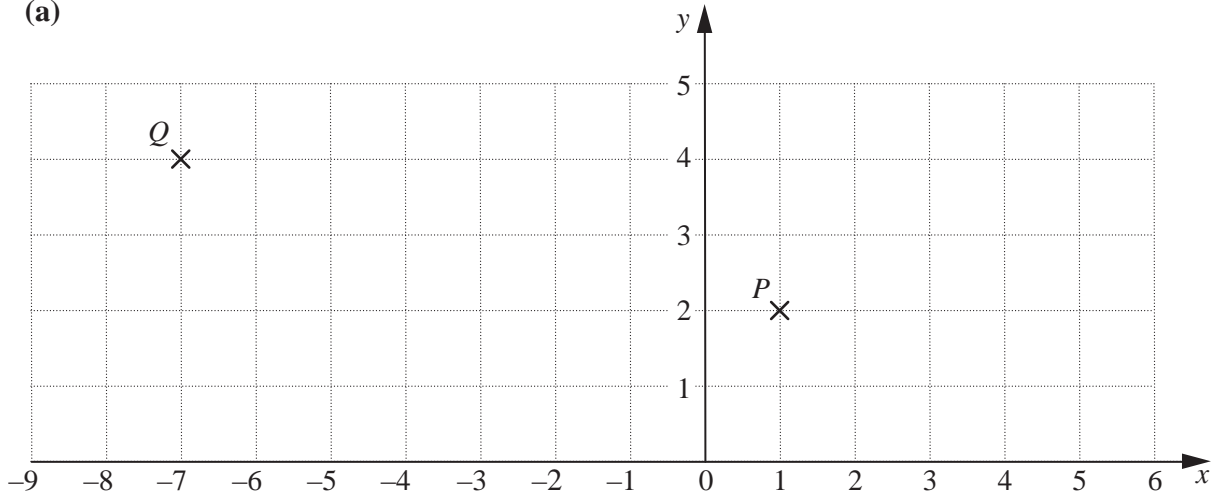
Hence write down the coordinates of  $L$ .

Answer (a) (....., .....) [3]

- (b)  $M$  is  $(-3, -2)$  and  $MN$  is parallel to the  $x$ -axis.  
The shaded region,  $R$ , **inside** triangle  $LMN$ , is defined by three inequalities.  
One of these is  $2y < 3x + 5$ .  
Write down the other two inequalities.

Answer (b) .....  
.....[2]

25 (a)



The grid above shows the points  $P(1,2)$  and  $Q(-7,4)$ .

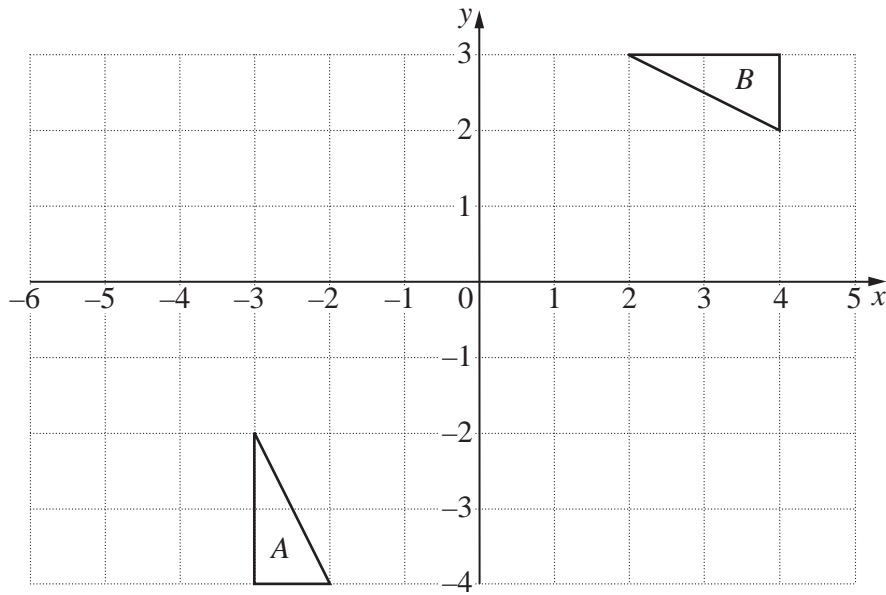
(i)  $P$  can be mapped onto  $Q$  by a translation. Write down its column vector.

Answer (a)(i)  $\begin{pmatrix} \phantom{0} \\ \phantom{0} \end{pmatrix}$  [1]

(ii)  $P$  can also be mapped onto  $Q$  by an enlargement, centre  $(5,1)$ . Write down its scale factor.

Answer (a)(ii) .....[1]

(b)



The diagram shows triangles *A* and *B*.

- (i) Describe **fully** the **single** transformation that maps triangle *A* onto triangle *B*.

Answer (b)(i) .....[1]

- (ii) Triangle *A* can also be mapped onto triangle *B* by a reflection in the line  $x = -1$  followed by a rotation.

Write down the centre of this rotation.

Answer (b)(ii) (.....,.....) [2]

---

Permission to reproduce items where third-party owned material protected by copyright is included has been sought and cleared where possible. Every reasonable effort has been made by the publisher (UCLES) to trace copyright holders, but if any items requiring clearance have unwittingly been included, the publisher will be pleased to make amends at the earliest possible opportunity.

University of Cambridge International Examinations is part of the Cambridge Assessment Group. Cambridge Assessment is the brand name of University of Cambridge Local Examinations Syndicate (UCLES), which is itself a department of the University of Cambridge.